















# Glucose Test Color Card

Match your experiment results to this chart to determine how much glucose is present in a sample of liquid.

TESTS	Neg.	100	250	500	1000	2000
Glucose/Glucosa mg/100 mL						
						



# pH Test Color Card

Match your experiment results to this chart to determine the pH of a sample.

